

SRI KANCHI MAHASWAMI VIDYA MANDIR WATER

CLASS:V

TASK : 1


FIND THE WORDS HIDDEN IN THE GRID

W	R	T	Y	U	T	E	E	Y	S	H	I	P	O	Q
G	I	F	U	S	D	I	N	G	D	O	S	F	F	C
H	K	S	O	E	R	U	I	A	D	M	N	V	C	T
B	B	M	N	Y	U	W	E	S	S	W	M	P	H	A
O	D	L	Y	R	C	W	S	X	Z	I	J	K	U	P
V	R	S	W	W	N	A	B	Y	R	S	E	Q	R	E
R	I	E	Z	A	U	S	C	V	B	E	T	T	A	P
G	N	A	S	T	Y	H	F	C	V	L	B	M	I	L
A	K	R	Y	E	T	I	K	K	P	Y	G	O	N	M
B	C	E	W	R	A	S	D	C	V	T	Y	I	P	L
A	V	H	R	E	W	C	O	O	L	I	S	P	A	E
T	I	R	W	J	U	L	D	T	W	S	N	A	D	S
H	D	K	E	Z	I	C	E	E	X	D	O	W	F	A
A	I	O	L	H	O	I	P	A	Z	P	W	E	S	F
C	B	M	G	F	D	C	F	F	P	O	J	H	S	E

Bath	gas	ice	safe	wisely	water	drink
tap	Wash	sea	snow	use		

FIND THE HIDDEN MESSAGE

U _____ Y



SRI KANCHI MAHASWAMI VIDYA MANDIR
WATER


CLASS:V

TASK : 2

- | | |
|----------------|------------|
| 1. 3 L 725 ml | 14.500 l |
| 2. 30 L 725 ml | 8685 l |
| 3. 8.685 l | 30.725 l |
| 4. 80685 ml | 3725 ml |
| 5. 1.450 l | 80.685 l |
| 6. 14500 ml | 1 L 450 ml |

II. Do as directed.

1. There are four drums containing 54 litres, 72 litres, 84 litres and 66 litres of water. Find the capacity of the largest can that can measure water in the four drums by the exact number of times.



2. Sudha bought water can and gave $\frac{1}{5}$ of the water from the can to her neighbour. By the end of the month she found that $\frac{3}{20}$ of the water in the can was left. Find what part of the water in the can she used in the month.

3. Kamala buys 2.75 litres of milk everyday from the milkman. Find out what quantity of milk she buys in 28 days?

4. A packet of soup makes 9 bowls of servings. How many $\frac{3}{4}$ bowls of servings are possible?

5. On a hiking trip, the hikers needed 1.75 litres of water each day. If the trip lasted 10 days how many litres of water did they carry?

II. Problem Solving.

1. A bottle of juice holds 750 ml of juice. Can two such bottles be poured into a jar that holds 1.5 litres?



2. A kettle holds about 900 ml of tea. How many tea cups of 150 ml each can it fill?

3. A shower drips at the rate of 150 ml an hour. How many litres of water would drip from it in 8 hours?

SRI KANCHI MAHASWAMI VIDYA MANDIR
WATER

CLASS:V

TASK : 5

I. Match the following.

- | | |
|-----------------------------|--|
| (i) Moving air | (a) smoke, dust,germs. |
| (ii) The heat of the sun | (b) Water vapour |
| (iii) A weather clock | (c) Shows which way the wind blows. |
| (iv) Air contains | (d) Big ball of fire. |
| (v) We should not | (e) Solid,liquid and gas. |
| (vi) The sun is a | (f) Changes water into watervapour. |
| (vii) A windvane helps | (g) Water from rain. |
| (viii) Three forms of water | (h) Waste water. |
| (ix) Air has | (i) is called wind. |
| (x) Rain water | (j) to find out the direction of the wind. |

II Identify the stages of water cycle and explain them:



SRI KANCHI MAHASWAMI VIDYA MANDIR

CLASS:V

TASK : 3

தலைப்பு: நீர்

கல்லணையை கட்டியவர் யார்? அவர் எந்த ஆண்டு கட்டி முடித்தார்? அது எந்த மாவட்டத்தில் அமைந்துள்ளது?



மேட்டூர் அணை - இது எந்த மாவட்டத்தில் உள்ளது என்றும், இதில் எவ்வளவு கொள்ளவு நீர் தேக்கி வைக்கப்படும் என்றும், எத்தனை மாவட்டத்திற்கு நீர் ஆதாரமாக விளங்குகிறது என்றும் கண்டறிந்து பட்டியலிடுக.

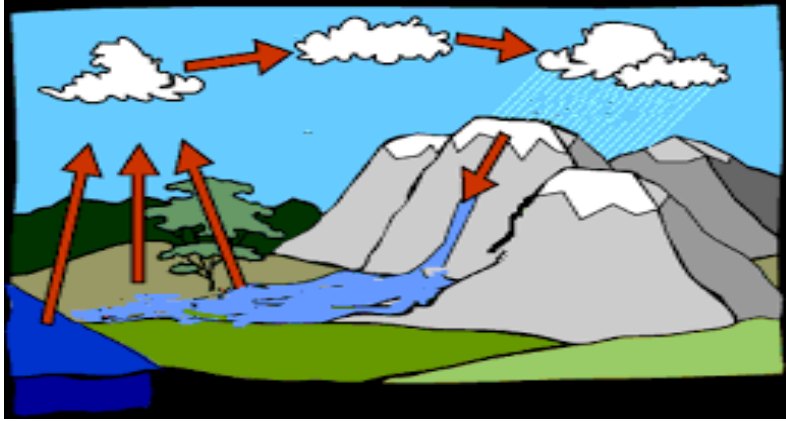


SRI KANCHI MAHASWAMI VIDYA MANDIR
WATER

CLASS :V

TASK 4

दिए गए जल चक्र म चित्र देखिए आर बताइए कि बादल कस बनत हैं ?



II. पानो का किन-किन रूपा म उपयाग किया जाता ह ?

